




Organic compounds: Types, Nomenclature, Properties

1. Identify the classes of molecules indicated by the pictures or chemical formulas below. Solid lines indicate carbon atoms. For simplicity, hydrogen atoms attached to the carbon atoms are sometimes not shown.



2. Provide the class of organic molecule given the names below

a) butanol \_\_\_\_\_

b) methyl ethanoate \_\_\_\_\_

c) propanal \_\_\_\_\_

d) diethyl ether \_\_\_\_\_

Fold quiz with your work inside, then write your name on the outside.